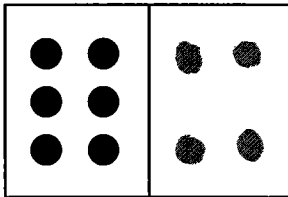


NAME \_\_\_\_\_


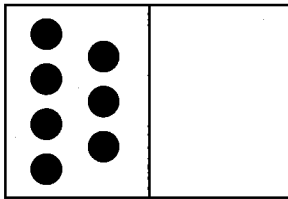
DATE \_\_\_\_\_

**Dots, Apples & Shapes** page 1 of 2

- 1** Draw the dots on the right side of each card to make 10.  
Then write a fact family to match.

**ex**

$$\begin{array}{r} 6 + 4 = 10 \\ 4 + 6 = 10 \\ 10 - 6 = 4 \\ 10 - 4 = 6 \end{array}$$

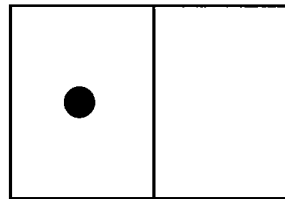
**a**


---

---

---

---

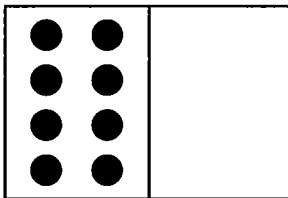
**b**


---

---

---

---

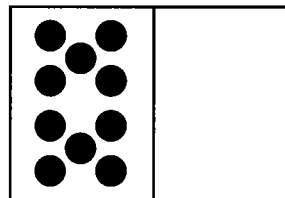
**c**


---

---

---

---

**d**


---

---

---

---

- 2** Fill in the missing numbers.

$9 + \square = 10$

$\square + 1 = 10$

$4 + 6 = \square$

$10 + \square = 10$

$10 - 6 = \square$

$10 - 7 = \square$

$10 - 1 = \square$

$10 - 8 = \square$

$10 - \square = 6$

$\square - 1 = 9$

$10 - 4 = \square$

$10 - \square = 8$

*(continued on next page)*


NAME \_\_\_\_\_

| DATE \_\_\_\_\_

**Dots, Apples & Shapes** page 2 of 2


- 3** There were 3 apples on the table. Jan put 6 more apples on the table. How many apples were on the table in all? Show your work.

There were \_\_\_\_\_ apples on the table in all.




- 4** **CHALLENGE** Make a picture that is worth 14¢. You can use as many as you like of these shapes. Label your picture. Prove that it is worth 14¢.

Square: 5¢



Circle: 2¢



Triangle: 1¢



NAME \_\_\_\_\_

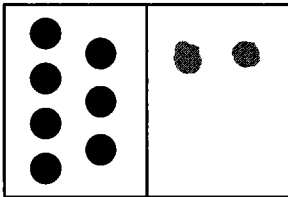
DATE \_\_\_\_\_



# Dots & Dollars page 1 of 2

**1** Draw the dots on the right side of each card to make 9.  
Then write a fact family to match.

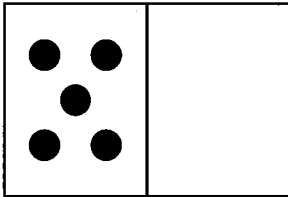
**ex**



$$\begin{array}{r} 7 + 2 = 9 \\ 2 + 7 = 9 \\ 9 - 7 = 2 \\ 9 - 2 = 7 \end{array}$$



**a**



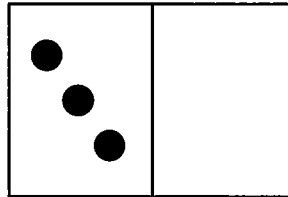
\_\_\_\_\_

\_\_\_\_\_

\_\_\_\_\_

\_\_\_\_\_

**b**



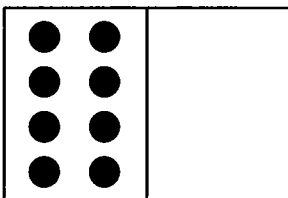
\_\_\_\_\_

\_\_\_\_\_

\_\_\_\_\_

\_\_\_\_\_

**c**



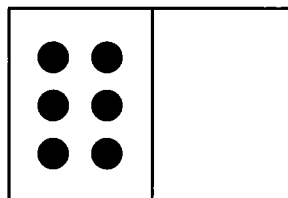
\_\_\_\_\_

\_\_\_\_\_

\_\_\_\_\_

\_\_\_\_\_

**d**



\_\_\_\_\_

\_\_\_\_\_

\_\_\_\_\_

\_\_\_\_\_

**2** Fill in the missing numbers.

$9 + \square = 9$

$\square + 7 = 9$

$6 + 3 = \square$

$9 + \square = 9$

$9 - 3 = \square$

$9 - 6 = \square$

$9 - 4 = \square$

$9 - 5 = \square$

$9 - \square = 0$

$\square - 2 = 7$

$9 - 8 = \square$

$9 - \square = 5$

*(continued on next page)*

NAME \_\_\_\_\_

DATE \_\_\_\_\_

**Dots & Dollars** page 2 of 2

- 3** Marco has 6 dollars. How many more dollars does he need to have 10 dollars in all?  
Show your work.

Marco needs \_\_\_\_\_ dollars to have 10 dollars in all.



- 4 CHALLENGE** Katy and her two friends have 5 dollars each. They want to buy a game that costs 18 dollars. How much more money do they need? Show your work.

Katy and her friends need \_\_\_\_\_ more dollars to have 18 dollars in all.